

Name: \_\_\_\_\_

Time to the Nearest Minute

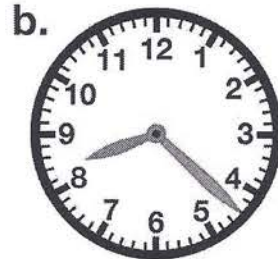
# Telling Time

To the Nearest Minute

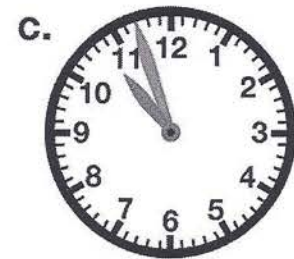
Write the time shown on each clock.




\_\_\_\_ : \_\_\_\_



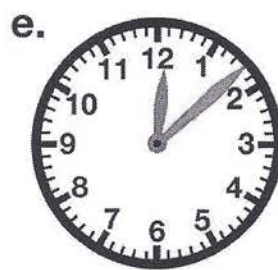
\_\_\_\_ : \_\_\_\_



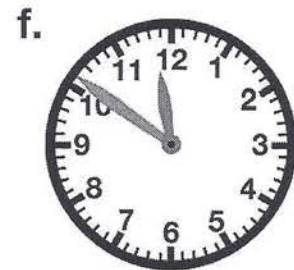
\_\_\_\_ : \_\_\_\_




\_\_\_\_ : \_\_\_\_



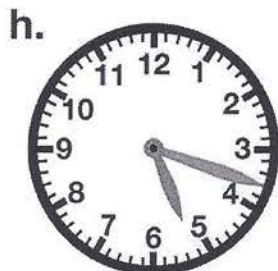
\_\_\_\_ : \_\_\_\_



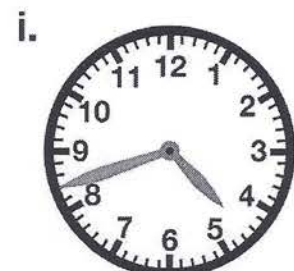
\_\_\_\_ : \_\_\_\_



\_\_\_\_ : \_\_\_\_



\_\_\_\_ : \_\_\_\_



\_\_\_\_ : \_\_\_\_

Name: \_\_\_\_\_


Time to the Nearest Minute

ANSWER KEY

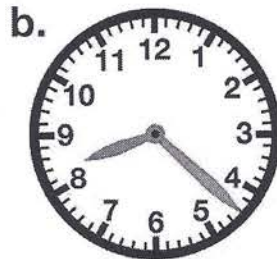
# Telling Time

To the Nearest Minute


Write the time shown on each clock.




9:29



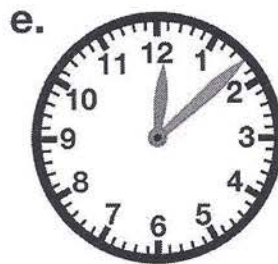
8:22




10:57




7:49



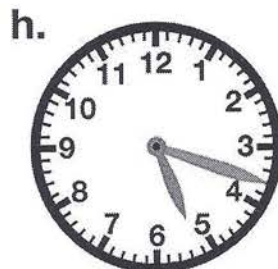
12:08



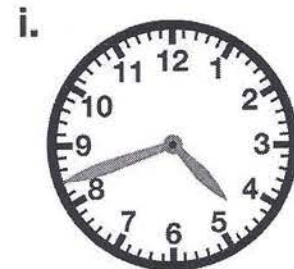
11:51



6:23



5:18



4:42